



SIMPLE SCIENCE

Sunflower Anatomy

ANSWER KEY

Can you match the words on this page to the correct parts of a sunflower?

All you have to do is 1. Write the correct number inside each circle,

and 2. Fill in the blank below the picture.

1 leaves

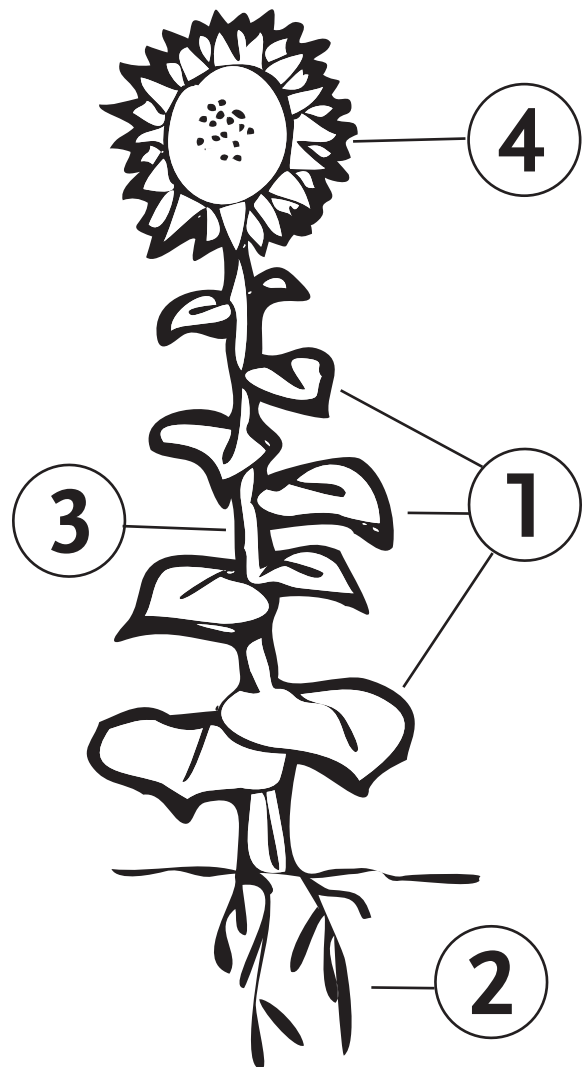
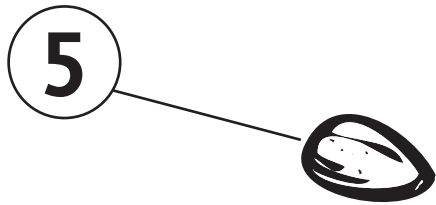
2 roots

3 stem

4 flower

5 seed

6 sprout



This plant is a sunflower.



SIMPLE SCIENCE

Sunflower Anatomy

Name _____

Can you match the words on this page to the correct parts of a sunflower?

All you have to do is 1. Write the correct number inside each circle,
and 2. Fill in the blank below the picture.

1 leaves

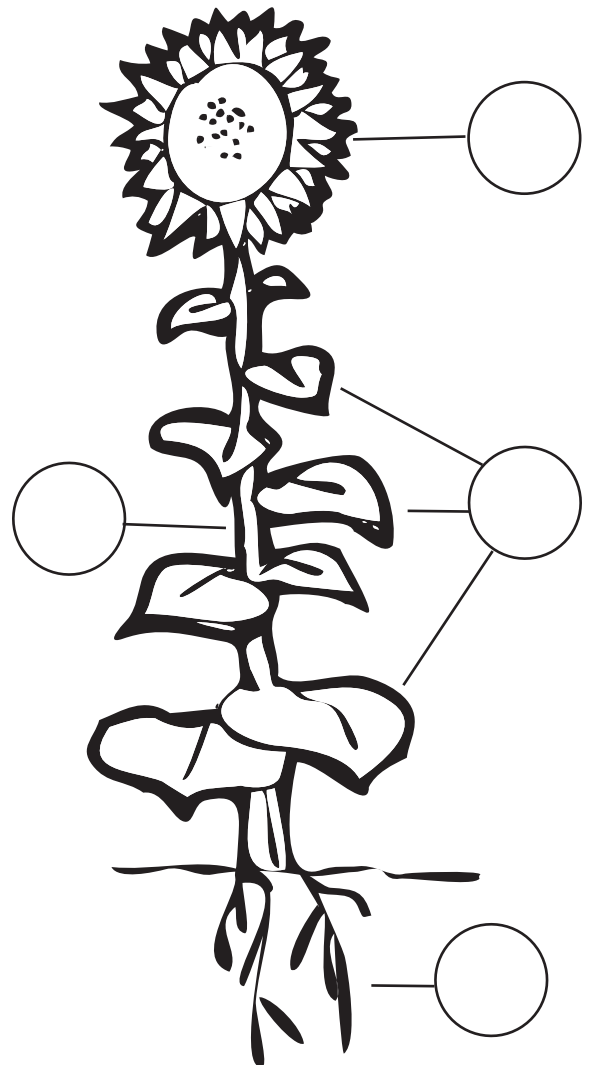
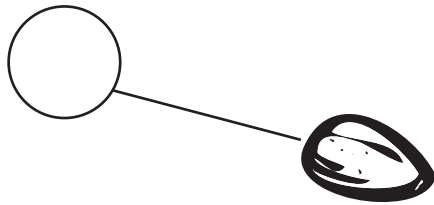
2 roots

3 stem

4 flower

5 seed

6 sprout



This plant is a _____.